



# Let's Practice Subtraction!

Count the pictures and subtract.

Example:

  $5 - 3 = 2$  

5      take away 3      equals      2

1   2   3   4   5   6   7   8   9   10



$4 - 3 = \underline{\quad}$



$2 - 2 = \underline{\quad}$




$3 - 1 = \underline{\quad}$



$5 - 2 = \underline{\quad}$



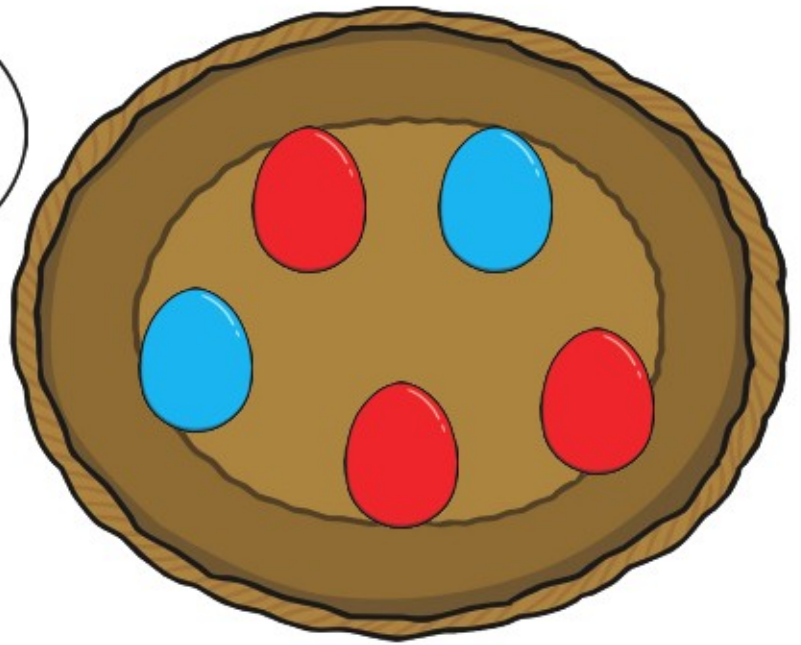
$3 - 2 = \underline{\quad}$



$5 - 1 = \underline{\quad}$




How many  
Easter eggs are in  
the basket?



$$\text{Red Egg} \square + \text{Blue Egg} \square = \square$$



How many  
Easter eggs are in  
the basket?



$$\text{Yellow Egg} \square + \text{Green Egg} \square = \square$$