






Name: _____

Date: _____

WEIGHT

How many cubes does the object weigh?

Test your prediction and record the results in the table below.

| Object | ruler  | scissors  | glue  | shoe  | rock  |
|------------|--|---|--|---|---|
| Prediction | cubes | cubes | cubes | cubes | cubes |
| Result | cubes | cubes | cubes | cubes | cubes |

Now draw the lightest and heaviest item.

Lightest

Heaviest